

5er- Reihe

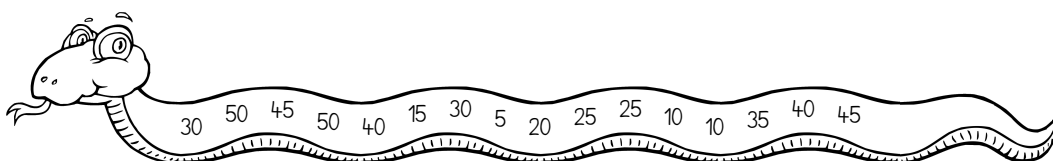
1. Löse die Aufgaben. Kontrolliere mit der Schlange.

$9 \cdot 5 = \underline{\quad}$ $5 \cdot 5 = \underline{\quad}$ $6 \cdot 5 = \underline{\quad}$ $6 \cdot 5 = \underline{\quad}$

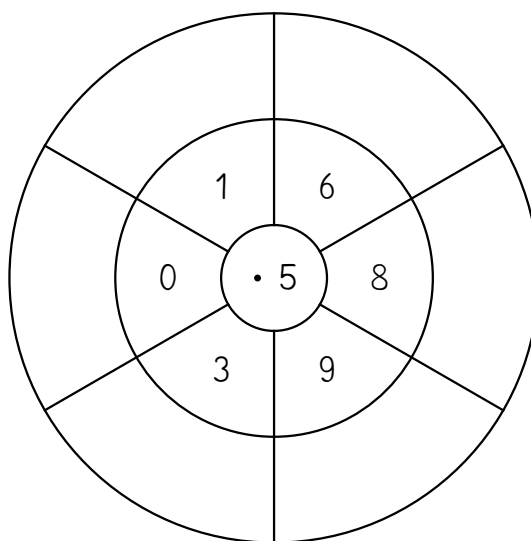
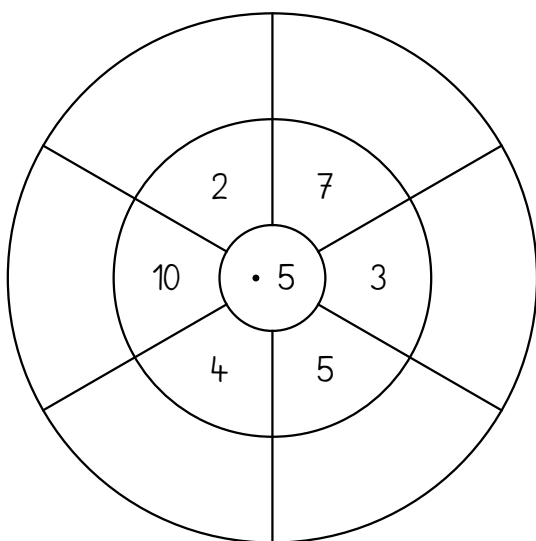
$2 \cdot 5 = \underline{\quad}$ $3 \cdot 5 = \underline{\quad}$ $7 \cdot 5 = \underline{\quad}$ $10 \cdot 5 = \underline{\quad}$

$1 \cdot 5 = \underline{\quad}$ $8 \cdot 5 = \underline{\quad}$ $9 \cdot 5 = \underline{\quad}$ $5 \cdot 5 = \underline{\quad}$

$4 \cdot 5 = \underline{\quad}$ $10 \cdot 5 = \underline{\quad}$ $8 \cdot 5 = \underline{\quad}$ $2 \cdot 5 = \underline{\quad}$



2. Rechne aus.



3. Schreibe die 5er-Reihe auf.

